


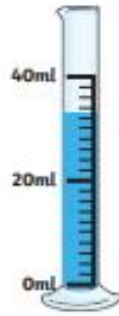
Measuring Volume

Aim: I can measure volume.

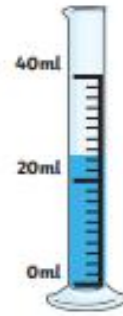
How much water is there in each jug?



1. _____ ml



2. _____ ml



3. _____ ml



4. _____ ml



5. _____ ml



6. _____ ml



7. _____ ml



8. _____ ml



9. _____ ml