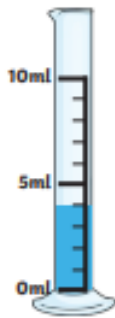


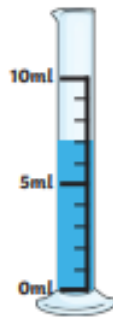
Measuring Volume

Aim: I can measure volume.

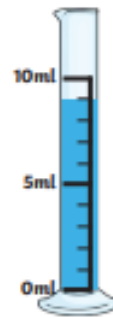
How much water is there in each jug?



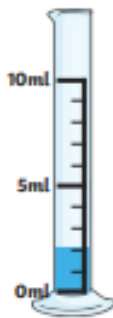
1. _____ ml



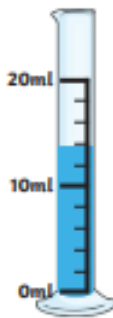
2. _____ ml



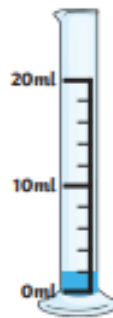
3. _____ ml



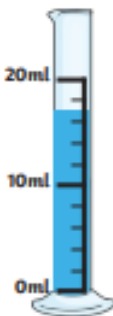
4. _____ ml



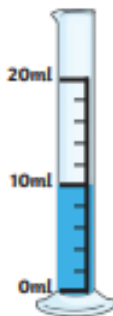
5. _____ ml



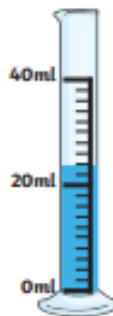
6. _____ ml



7. _____ ml



8. _____ ml



9. _____ ml