

Tally Charts — Captain Magpie

Task 1

Captain Magpie has been counting her treasure. She has used a tally chart to show how many she has of each item of treasure.



Treasure	Tally	Total
Jewels	 	8
Coins	 	16
Necklaces		2
Rings	 	12



Answer the questions using the tally chart above.

1. How many jewels does Captain Magpie have?

.....

2. What does Captain Magpie have twelve of?

.....

3a. How many more jewels than necklaces does Captain Magpie have?

.....

3b. Write a number sentence to show how you worked this out.

.....



Tally Charts — Captain Magpie

4. Which treasure item does Captain Magpie have the fewest of?

.....

5. Which treasure item does Captain Magpie have the most of?

.....

6. If Captain Seagull stole half of her coins, how many would Captain Magpie have left?


.....

7. What is the difference between the number of rings and the number of necklaces?

.....

8. True or false? Captain Magpie has over 30 items of treasure.


.....



Tally Charts — Captain Magpie

Task 2

Captain Seagull has been collecting treasure items too. He has also used a tally chart to show how many he has of each item of treasure.



Treasure	Tally	Total
Jewels	 / / / /	8
Coins	 / / / / / / / /	10
Necklaces		3
Rings	 / / / /	6

Answer the questions using both Captains' tally charts.

1. Who has the most coins?
2. Who has fewer necklaces?
3. How many more coins does Captain Magpie have than Captain Seagull?
4. What treasure item do they both have the same number of?
.....
5. Captain Seagull says he has half the number of rings as Captain Magpie. Is he correct?
.....



Tally Charts — Captain Magpie

Answers

Task 1

Captain Magpie has been counting her treasure. She has used a tally chart to show how many she has of each item of treasure.



Treasure	Tally	Total
Jewels	 	8
Coins	 	16
Necklaces		2
Rings	 	12



Answer the questions using the tally chart above.

1. How many jewels does Captain Magpie have?

8

2. What does Captain Magpie have twelve of?

rings

3a. How many more jewels than necklaces does Captain Magpie have?

6

3b. Write a number sentence to show how you worked this out.

$8 - 2 = 6$



Tally Charts — Captain Magpie

Answers

4. Which treasure item does Captain Magpie have the fewest of?

necklaces



5. Which treasure item does Captain Magpie have the most of?

coins

6. If Captain Seagull stole half of her coins, how many would Captain Magpie have left?


8

7. What is the difference between the number of rings and the number of necklaces?

10

8. True or false? Captain Magpie has over 30 items of treasure.

True




Tally Charts — Captain Magpie

Answers

Task 2

Captain Seagull has been collecting treasure items too. He has also used a tally chart to show how many he has of each item of treasure.



Treasure	Tally	Total
Jewels	 / / / /	8
Coins	 / / / / / / / /	10
Necklaces		3
Rings	 / / / /	6

Answer the questions using both Captains' tally charts.

1. Who has the most coins? **Captain Magpie**
2. Who has fewer necklaces? **Captain Magpie**
3. How many more coins does Captain Magpie have than Captain Seagull? **6**
4. What treasure item do they both have the same number of?
jewels
5. Captain Seagull says he has half the number of rings as Captain Magpie. Is he correct?
Yes

